


Would You Rather 3 - 5

Prompts from: <https://www.wouldyourathermath.com/>

These prompts are meant for children to have mathematical conversation around their choice between two options. There are no wrong answers. Children should decide which option they would rather choose and explain why through math work and math talk. Children can use the third page to organize their thoughts.

Have a box of chocolates with 5 rows and 14 columns
or
7 rows and 9 columns?




h/t @MrsJennCarr

Would You Rather...

Read 12 pages every night in a chapter book with 144 pages?

Read 50 pages 3 times a week in a chapter book with 132 pages?



Would you rather buy

18 eggs at this price or 18 eggs at this price?



Would you Rather...

Have Cheez-It's® to cover a rectangle with..

A length of 9 and a perimeter of 22



Or

A length of 5 and a perimeter of 20

www.wouldyourathermath.com

Would you rather?

Length of 20 ft. and a perimeter of 58 ft.

Have a rectangular bedroom with a... OR

Length of 14 ft. and a perimeter of 56 ft.



Share equal slices of cake from pan A with 8 friends OR share equal slices of cake from pan B with 6 friends?

Cake A

15" x 15"

Happy Birthday!

Cake B

12" x 17"

Happy Birthday!

www.wouldyourathermath.com



Would You Rather...

Sell a batch of 30 cookies for 50 cents each with a cost to make of \$8?

OR

Sell a batch of 30 cookies altogether for \$15 with a cost to make of \$6?



Would you rather buy...

Option A
8 pound jug of ice cream for \$24.56

or...

Option B
Two 3 pound 11 ounce jugs of ice cream for \$23.60

Go on a 5 minute shopping spree in the department store of your choice

OR

Receive a \$2,000 gift card to the department store of your choice?



h/t @HRSBMathematics
Photo credit: Caron Crawford via Flickr.com

Have the revenue from an amusement park Ferris wheel *or* carousel ride?



4 tickets to ride



3 tickets to ride

Waffle Mix for \$4.99

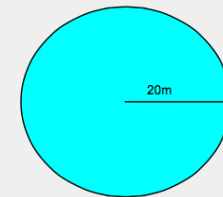
OR



Frozen Waffles for \$2.79

h/t @DaneEhert

Run the circumference of the circle OR perimeter of the rectangle?



Name _____

Would You Rather?

Option A	or	Option B
	Break it down. ↓	
	Conclusion	
I would rather...		
because		

Would You Rather?

Option A	or	Option B
	Break it down. ↓	
	Conclusion	
I would rather...		
because		